









Name: _____ Class & sec: _____ Date: _____

Q1) Match the words with the correct picture:

1. Water transport	
2. Land	
3. Farm animals	
4. Globe	
5. kitchen	
6. Farmer	

Q2) Write (T) for the true and (F) for the false against each statement:

1. The animals we use to carry loads should be treated kindly. _____
2. We sleep in the dining room. _____
3. Car and bus moves in to the water. _____
4. Every citizen works for the progress of his country.
5. The four serrations of Bahrain Flag represent the five pillars of Islam. _____

Q3) Choose the correct word to complete the following statements:




1. The Flag of Bahrain is _____ and _____ in colour. (Green and white / red and white)
2. The blue parts show _____ (water / land)
3. _____ are also used for transport. (People / animals)
4. The meaning of Mahd As-Salam is _____ (Cradle of peace / independence)

Q4) Choose and complete the following sentences with the help of word bank:


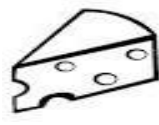
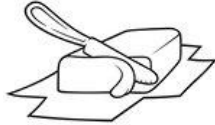
Healthy, store room, Plants and greenery, Traffic police, Leather, No noise

1. _____ is one of the common Profession of Bahraini people.
2. We keep things we do not need every day in the _____.
3. We get _____ from goats and cows skin.
4. "No Horn" sign means _____.
5. It is important to keep the animals _____.
6. Our home looks nice with _____ and _____.




Q5) Name the following pictures:

 _____	 _____	 _____
--	--	--









Q6a) Name the things that are made from milk:

<p>i.</p>  _____	<p>ii.</p>  _____	<p>iii.</p>  _____
--	---	--

b) Name the things that are made from leather:

 _____	 _____	 _____
---	--	--

Q7) Fill in the missing letters and complete the name of the following farm animals:

<p>B u _ _ a l _ _</p> 	<p>D _ _ g</p> 
<p>C _ _ w</p> 	<p>Ca _ _ e _</p> 
<p>G _ _ a _ _</p> 	<p>D _ n k _ y</p> 
<p>C _ _ i c _ _ e n</p> 	<p>H _ r _ _ e</p> 

Q8) Answer the following question:

Q1) How should we behave with farm and pet animals? Write 3 sentences.

1. _____

2. _____

3. _____

Q2) What is the shape of the earth?

Ans: _____

Q3a) What are the main occupations of Bahraini people?

Ans: _____

b. Draw and colour The Flag of Bahrain in the box given below:

