



Pakistan Urdu School-Kingdom Of Bahrain-Primary Section
Grade 2 Maths Revision for 3rd Term Exam 2020

Name: _____ Class: _____ Date: _____

Q.1 Choose and write the correct answer.

- 1) At half past the hour, the long hand point towards _____ (6 , 3)
- 2) Cone is a _____ shape. (2D, 3D)
- 3) A Cylinder has _____ vertices. (0 , 8)
- 4) Quarter of a Circle called _____ (Quadrant , Semi Circle)
- 5) $64 \div 8 = \square$ (8, 4)





Q.2 Circle (true) for the correct one and (False) for the wrong one.

- 1) The short hand in a clock is also called hour hand. (True / False)
- 2) There are 11 months in a year. (True / False)
- 3) 7 times 5 is 36. (True / False)
- 4) Half of a Circle is called Semi circle . (True / False)
- 5) There are 36 balls for 9 boys . Then each boy will get 4 balls. (True / False)

Q.3 Fill in the blanks.

- 1)) The answer of a division sum is called _____ .
- 2) 1 hour = _____ minute
- 3) nine hundred twelve is written as _____
- 4) 1 day = _____ hours
- 5) _____ means grouping or sharing.

Q.4 Draw the hands of the clock according to the time given below.



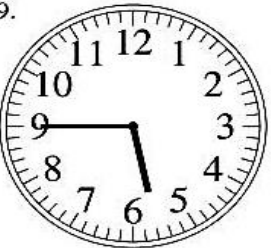



9 : 15	10 : 00	5 : 30	8 : 45
			

Q.5 Show that $15 \div 3 = 5$ as a series of repeated subtraction.

$$\begin{array}{r} 15 \\ - 3 \\ \hline \end{array}$$

0

Q.6 Read the time and write it in the space under the clock.

7. 	8. 	9. 
_____	_____	_____
10. 	11. 	12. 
_____	_____	_____

Q.7 Divide the following

$$\begin{array}{r} \\ 5 \overline{) 25} \\ \underline{} \\ \end{array}$$

$$\begin{array}{r} \\ 6 \overline{) 48} \\ \underline{} \\ \end{array}$$



$$\begin{array}{r} \\ 7 \overline{) 14} \\ \underline{} \\ \end{array}$$

$$\begin{array}{r} \\ 4 \overline{) 20} \\ \underline{} \\ \end{array}$$

Q.8 Write the multiplication and division facts.

1) 5 10 2	2) 6 12 2

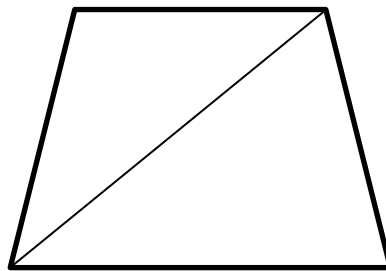

Q.9 Write the properties of given shapes.

Shapes	Name	Faces	Edges	vertices
				
				
				
				

Q.10 Draw a line segment RS of 5 cm.



Q.11) Colour the vertical lines **Blue** ,horizontal lines **Red** and the oblique lines **Orange**.



Q.12) Look at the Calendar and answer the questions below.

FEBRUARY 2020						
Sunday	Monday	Tuesday	Wednesday	Thursday	Friday	Saturday
						1
2	3	4	5	6	7	8
9	10	11	12	13	14	15
16	17	18	19	20	21	22
23	24	25	26	27	28	29

Choose the correct answer from the bracket.

- 1) February is the _____ month of the year.
- 2) There are _____ days in the month of February .
- 3) 3rd week of February has _____ days.
- 4) The day 15th February is _____ .