








Pakistan Urdu School- Kingdom of Bahrain-Primary Section
Revision for third term examination 2019- 2020
Subject : Science Grade : 2

Students Name: _____ **Class:** _____ **Date:** _____

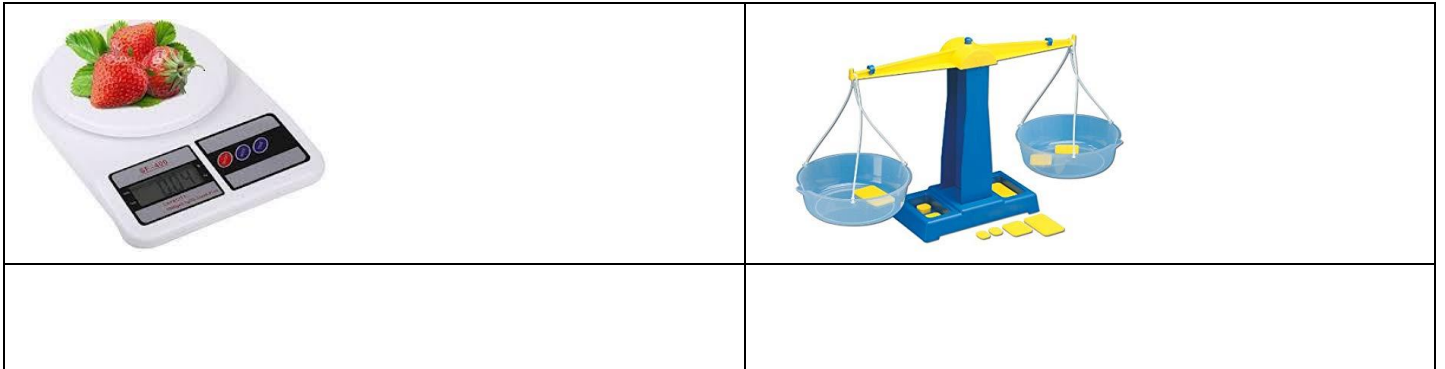
QI. Match the following pictures with their correct names:

	Column A	Column B
1.		Opaque object ()
2.		Measuring instrument ()
3.		Transparent object


QII). Look at the pictures and write which part shows Opaque, Transparent and Translucent

QIII). Write the name of measuring instruments used in the pictures given below.



QIV). Name the pictures.



QV). Choose the correct answer:

- 1). Clock works with _____. (Electricity, battery)
- 2). Moving air is called _____ (wind, smoke)
- 3). Light can not pass through _____. (wood, water)
- 4). My mother wears a _____ on her wrist. (clock, watch)
- 5). Light travels in curve shape. _____ (True, False)
- 6). Television works with battery. _____(True, False)

QVI). Answer the following questions in one or two words.

1). Any two objects that work with help of battery.

Ans 1: _____ 2: _____

2) Name any two objects that work with help of electricity.

Ans 1: _____ 2: _____

3) Who invented the first electric bulb? Ans: _____

4). Name any one opaque, transparent and translucent object.

Opaque: _____ Transparent: _____

Translucent: _____

5). Name any one instrument to measure length. Ans: _____

6). Write any one way in which air can become dirty.

Ans). _____

QVII). Solve the riddles and write the name of the season.

1). Leaves turns yellow, red or brown and start falling off the trees. Write the name of the season. Ans: _____

2). New leaves and buds grow. It begins to get warmer with flowers blooming in the garden. Write the name of the season. Ans: _____

3). It is cold and windy. The nights are long and chilly. Ans: _____

4). You eat mangoes an wear light clothes. The days are long and hot. Ans: _____

QVIII). Answer the questions in detail.

1). What are the uses of thermometer?

Ans 1: _____

2: _____

2). What type of clothes do we wear during summer season?

Ans: _____

b). Give Reason

1). Spring is called the season of flowers. Why?

Ans: _____

Q2). Small batteries can not be used to work a big electrical object. Why ?

Ans: _____

QIX). Write the name and two sentences about the season.



Name of the season: _____

1). _____

2). _____

QIX) Draw and name any one object for the following.

Source of light	works with electricity	works with battery	Measuring instrument