









**Pakistan Urdu School- Kingdom of Bahrain—Primary Section**

**Grade II- Social Studies**

**Revision Activity sheet-3<sup>rd</sup> Term March 2020**

Name: \_\_\_\_\_ Class & sec: \_\_\_\_\_ Date: \_\_\_\_\_

**Q I) Match the words with the correct pictures:**

1. Postman	
2. Factory neighbourhood	
3. Map of Bahrain	
4. Natural environment	
5. Old building	
6. Flag of Pakistan	

**Q 2) Write (T) for the true and (F) for the false against each statement:**

- 1) The name of our country is Islamic Republic of Pakistan. \_\_\_\_\_
- 2) Bahrain is an archipelago of 23 islands. \_\_\_\_\_
- 3) Karachi is the capital of Pakistan. \_\_\_\_\_
- 4) All neighbourhoods are same. \_\_\_\_\_
- 5) Bahrain is a neighbouring country of Saudi Arabia. \_\_\_\_\_

**Q3) Choose the correct word to complete the following statements:**




- 1) In a village we can see \_\_\_\_\_ in neighbourhood. (Shopping malls/farms)
- 2) \_\_\_\_\_ creates man made environment. (Buildings/ Mountains)
- 3) Pakistan has \_\_\_\_\_ provinces. (four/ five)
- 4) The capital city of Bahrain is \_\_\_\_\_. (Isa town/ Manama)
- 5) There are \_\_\_\_\_ countries in GCC. (five/ six)

**Q 4) Choose and complete the following sentences with the help of word bank:**

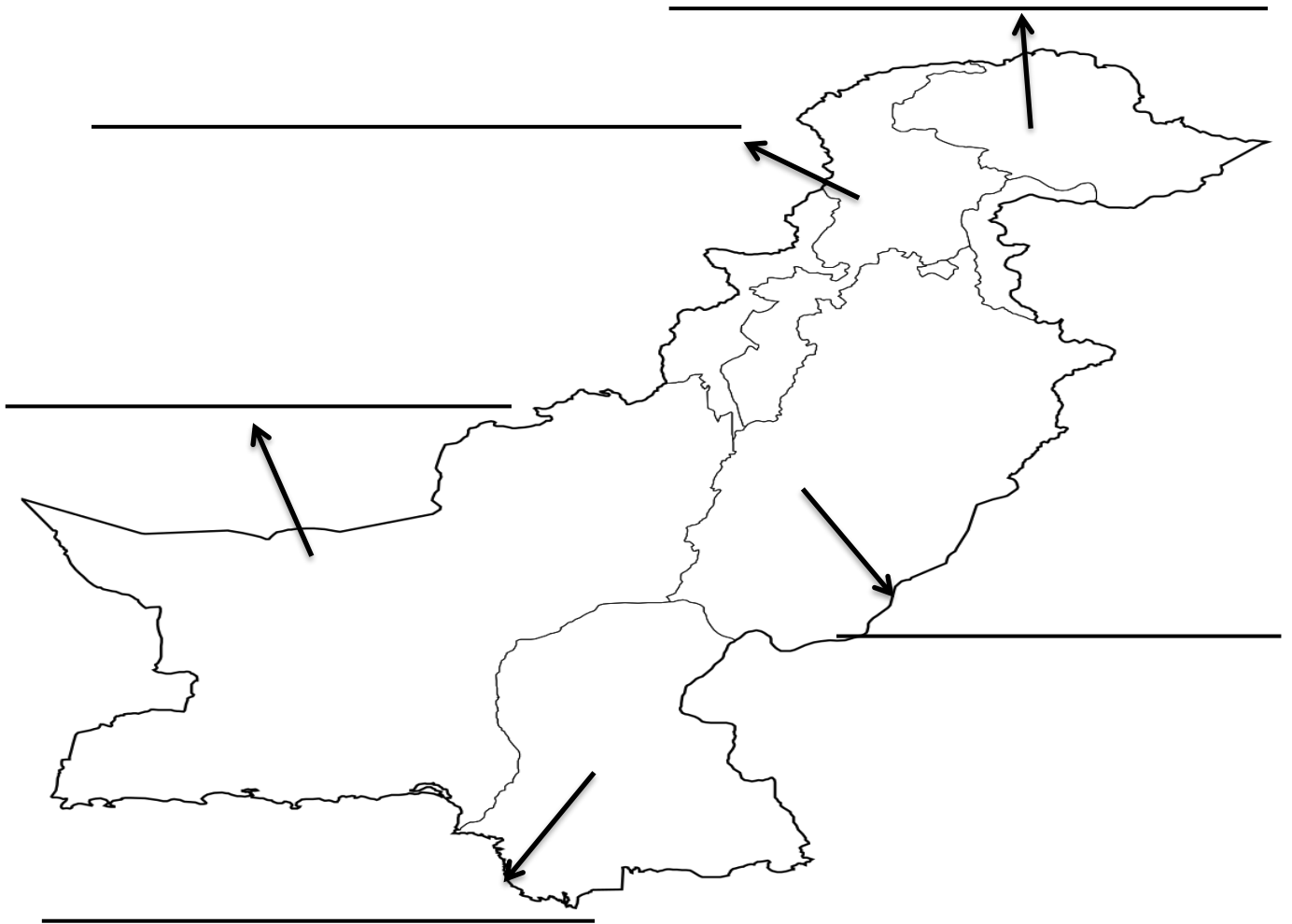
**Abu Dhabi - Buildings - simplified - Qatar and Saudi Arabia - neighbours**

- 1) A map shows the main features of an area in a \_\_\_\_\_ way.
- 2) People who live near you, they are your \_\_\_\_\_.
- 3) GCC was formed on May 25<sup>th</sup> 1981 at \_\_\_\_\_.
- 4) \_\_\_\_\_ change the natural environment.
- 5) Bahrain is located between \_\_\_\_\_ and \_\_\_\_\_.

**Q5) Identify and write name of the following pictures:**



**Q6) Name the provinces on the given map of Pakistan and write one sentences about our country:**



1. \_\_\_\_\_

**Q7) Answer the following questions in one sentences:**

Q1) What is the highest point in Bahrain?

Ans: \_\_\_\_\_

Q2) What does an address tell us?

Ans: \_\_\_\_\_

Q3) What is an environment?

Ans: \_\_\_\_\_

Q4) Which are the two countries connected by King Fahad Causeway?

Ans: \_\_\_\_\_

Q5.a) How neighbours can help each other? Write one sentence on it.

Ans: \_\_\_\_\_

**b. Draw and colour the flag of Bahrain.**

