



Pakistan Urdu School- Kingdom of Bahrain

Section: Middle

Subject: Mathematics

Revision worksheet

Student Name: _____










Date: _____

Grade: 4

UNIT 7: Time

Telling time Worksheet

Write the time.

<p>1 a.</p>  <p>_____ : _____</p>	<p>1 b.</p>  <p>_____ : _____</p>	<p>1 c.</p>  <p>_____ : _____</p>
<p>2 a.</p>  <p>_____ : _____</p>	<p>2 b.</p>  <p>_____ : _____</p>	<p>2 c.</p>  <p>_____ : _____</p>
<p>3 a.</p>  <p>_____ : _____</p>	<p>3 b.</p>  <p>_____ : _____</p>	<p>3 c.</p>  <p>_____ : _____</p>