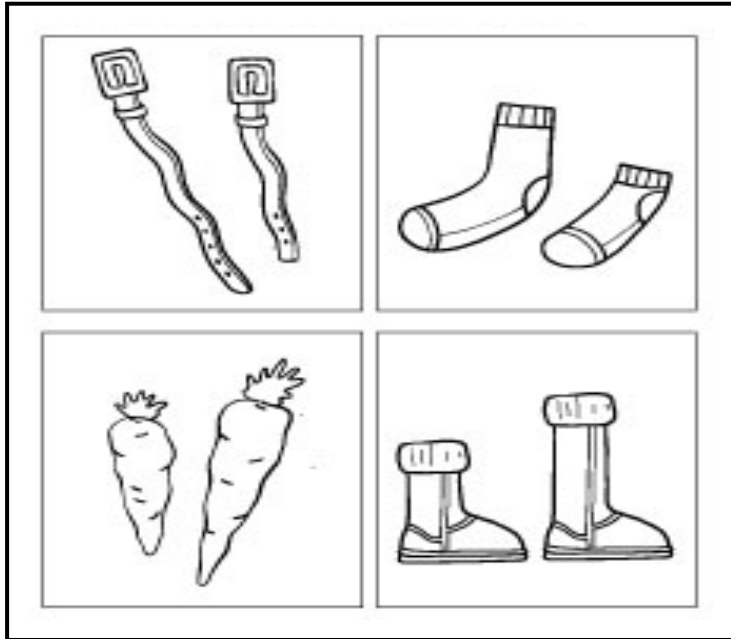




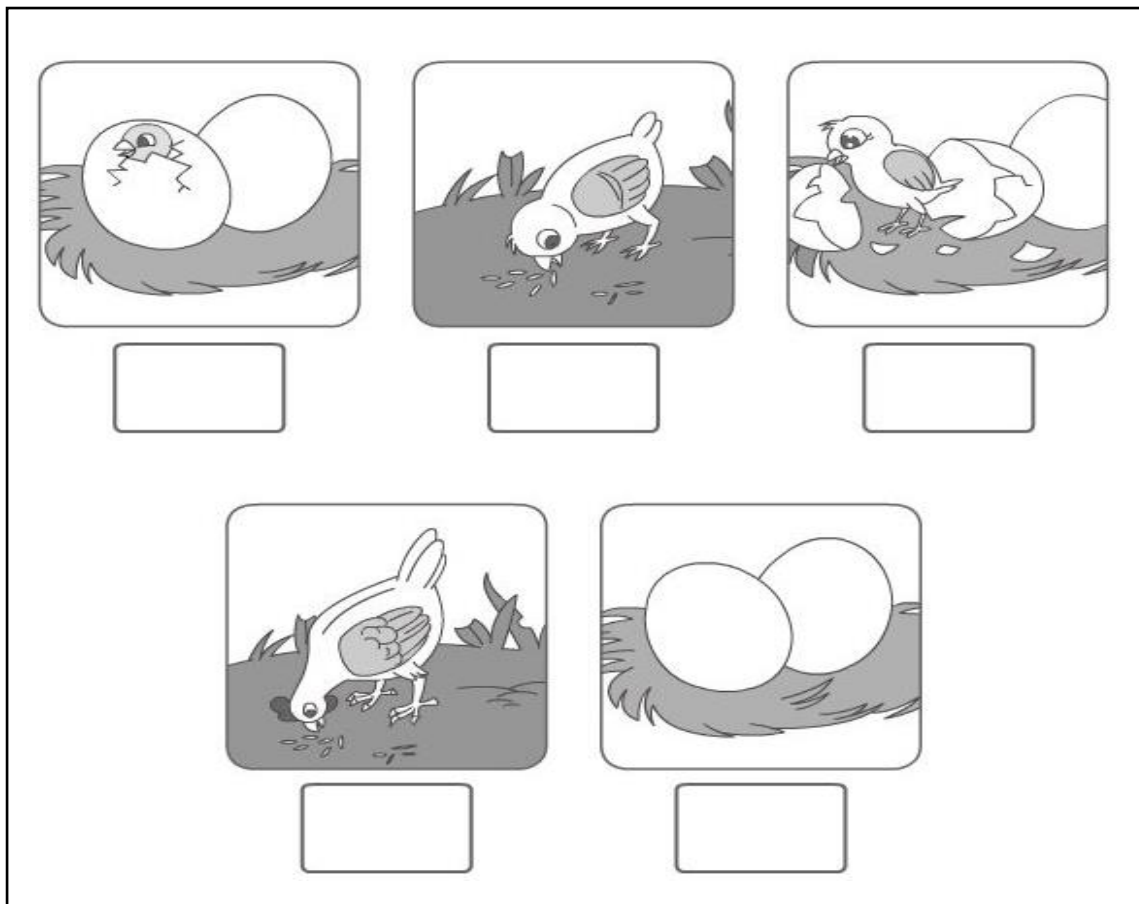
**Pakistan Urdu School-Kingdom Of Bahrain-Primary Section**  
**HKG Maths Revision for 3<sup>rd</sup> Term Exam 2020**

Name: \_\_\_\_\_ Class: \_\_\_\_\_ Date : \_\_\_\_\_


Q.1 Circle the shorter objects and tick ( ✓ ) the longer objects.



Q.2 Write the number to sequence the actions.



Q.3 Write the numbers in figures from 71-100.



<b>71</b>		
	<b>82</b>	
		<b>94</b>
	<b>87</b>	
<b>80</b>		<b>100</b>



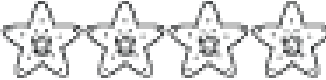

Q.4 Write the numbers in words.

42	
47	
50	
43	







Q.5 Complete the Table of 2.

$2 \times 1 =$	$2 \times 7 =$
$2 \times 2 =$	$2 \times 8 =$
$2 \times 3 =$	$2 \times 9 =$
$2 \times 4 =$	$2 \times 10 =$
$2 \times 5 =$	$2 \times 11 =$
$2 \times 6 =$	$2 \times 12 =$

Q.6 Subtract and write the correct answer in the box.

 $5 - 1 =$ _____
 $6 - 2 =$ _____
 $4 - 3 =$ _____
 $7 - 5 =$ _____

Q.7 Subtract the numbers Vertically.

$\begin{array}{r} 3 \\ - 2 \\ \hline \square \end{array}$ 	$\begin{array}{r} 4 \\ - 3 \\ \hline \square \end{array}$ 
$\begin{array}{r} 3 \\ - 1 \\ \hline \square \end{array}$ 	$\begin{array}{r} 2 \\ - 1 \\ \hline \square \end{array}$ 
$\begin{array}{r} 5 \\ - 2 \\ \hline \square \end{array}$ 	$\begin{array}{r} 4 \\ - 2 \\ \hline \square \end{array}$ 

Q.8 Observe the pattern and complete the sequence.

