

Pakistan Urdu School – Kingdom of Bahrain- Primary Section


Revision for 3rd Term Examination – March 2020

HKG-Science




Name: _____ Class: _____ Date: _____

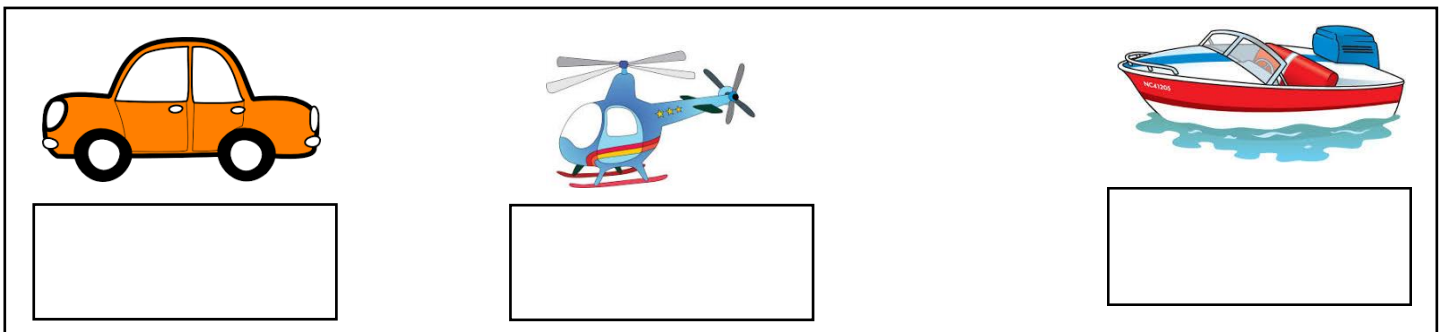
QI). Circle the things which gives us light.



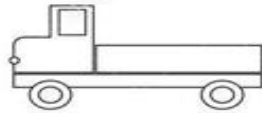
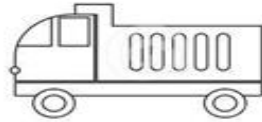
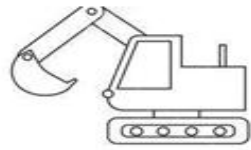
QII). Circle the uses for the tools from each row.



QIII). Write whether it is Air, Water or Land transport for the following pictures



QIV). Draw a line to match the pictures with their shadows.



QVI). Write whether it is Loud or Soft sounds for the pictures given below.

| | | | |
|--|--|--|--|
| | | | |
| | | | |

QVI). Name the pictures

| | | | |
|--|--|--|--|
| | | | |
| | | | |

QVII). Answer the following questions in one word.

1). Name any one water transport.

Ans: _____

2). Name any one land transport.

Ans: _____

3). Name any one air transport.

Ans: _____

4). Name any two sources of light.

Ans: _____

5). Name any one animal which makes loud sound.

Ans: _____

6). How many colours are there in a rainbow ?

Ans: _____

QVIII). Name the colours for the following pictures.



I am a tree. My colour is _____



I am an apple. My colour is

QIX). Draw and name any one object for the following.

| Source of light | Any one healthy food | Animal which makes soft sound |
|------------------------|-----------------------------|--------------------------------------|
| | | |
| | | |